

JAMHURI YA MUUNGANO WA TANZANIA

WIZARA YA ELIMU NA MAFUNZO YA UFUNDI

MTIHANI WA TAIFA WA DARASA LA NNE
MWAKA - 2007

SOMO LA HISABATI

051

JINA LA MTAHINIWA:

JINA LA SHULE :

HALMASHAURI:

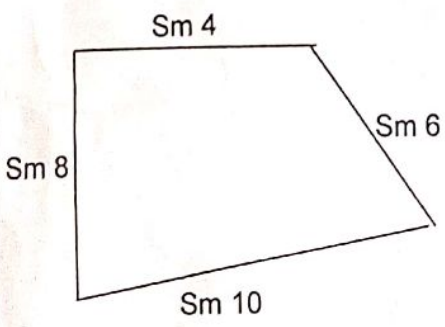

MKOA:

MUDA: SAA 1.00

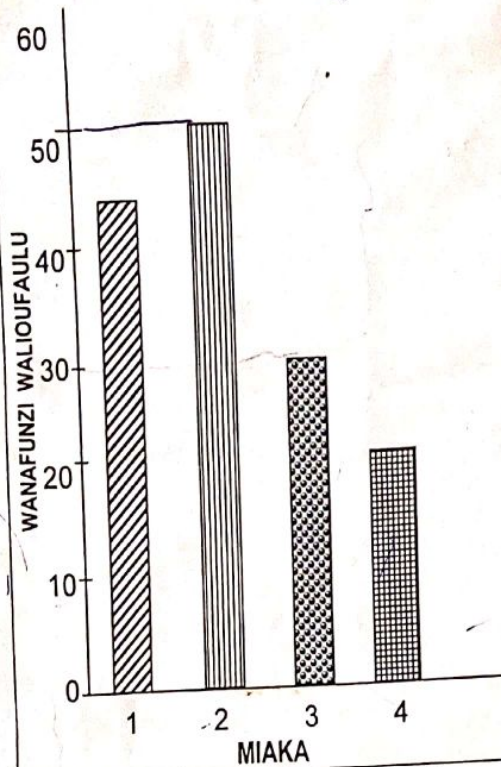
MAELEKEZO:

1. Karatasi hii ina maswali 25.
2. Jibu maswali yote kama ilivyoelekezwa.
3. Majibu yote yaandikwe kwenye karatasi hii.
4. Kumbuka kuandika Jina lako, Jina la Shule, Halmashauri na Mkoa wako.
5. Simu ya mkononi hairuhusiwi ndani ya chumba cha mtihani.

| S/Na. | SWALI | SEHEMU YA KAZI | MAJIBU |
|-------|---|----------------|--------|
| 1. | $\begin{array}{r} 534 \\ + 323 \\ \hline \end{array}$ | | |
| 2. | $\begin{array}{r} 764 \\ - 489 \\ \hline \end{array}$ | | |
| 3. | $157 + 294 + 163 =$ | | |
| 4. | $46371 - 13456 =$ | | |
| 5. | $\begin{array}{r} 960 \\ \times 12 \\ \hline \end{array}$ | | |
| 6. | $2912 \div 26 =$ | | |
| 7. | Tafuta thamani ya A $\begin{array}{r} A 5 6 9 \\ + 7 A 7 A \\ \hline 12 0 A 3 \end{array}$ | | |
| 8. | Andika namba 47 kwa kirumi. | | |
| 9. | Masaa 5 dakika 25 ni sawa na dakika ngapi? | | |
| 10. | Sentimita 1500 ni sawa na mita ngapi? | | |
| 11. | $\frac{3}{9} + \frac{4}{9} =$ | | |
| 12. | Andika namba 87590 kwa maneno | | |
| 13. | $\frac{7}{8} - \frac{5}{8} =$ | | |

| | | | | | | | | | | | |
|---------|---|-----|----|---------|----|---------|----|-------|--|--|--|
| 14. | Kiwanja kina urefu wa mita 120 na upana wa mita 55. Tafuta eneo lake. | | | | | | | | | | |
| 15. | Ujazo wa pipa ni lita 1000. Je ndoo ngapi zenye ujazo wa lita 20 zitajaza pipa hilo? | | | | | | | | | | |
| 16. | Alex alinunua vitu vifuatavyo: mikate 4 @ sh. 1000/=, Mayai 10 @ sh. 200/=, sukari kilo 2 @ sh. 1000/= na majani ya chai bunda 2 @ sh. 350/=. Jumla alilipa shilingi ngapi? | | | | | | | | | | |
| 17. | Andika kwa tarakimu elfu sita, mia sita na sita | | | | | | | | | | |
| 18. | Shule ya Msingi Kwale ina madarasa saba. Kila darasa lina wanafunzi 45. Je shule ya Kwale ina wanafunzi wangapi jumla? | | | | | | | | | | |
| 19. | Tafuta mzingo wa umbo hili.  | | | | | | | | | | |
| 20. |  Eneo lililotiwa kivuli ni sehemu gani ya umbo hili? | | | | | | | | | | |
| 21. | <table style="margin-left: 20px;"> <tr> <td>Sh.</td> <td>St</td> </tr> <tr> <td>1 3 6 8</td> <td>25</td> </tr> <tr> <td>+ 1 7 3</td> <td>15</td> </tr> <tr> <td colspan="2"><hr/></td> </tr> </table> | Sh. | St | 1 3 6 8 | 25 | + 1 7 3 | 15 | <hr/> | | | |
| Sh. | St | | | | | | | | | | |
| 1 3 6 8 | 25 | | | | | | | | | | |
| + 1 7 3 | 15 | | | | | | | | | | |
| <hr/> | | | | | | | | | | | |
| 22. | Anita ana kamba yenye urefu wa meta 25 na John ana kamba yenye urefu wa sentimita 2500. Je, nani ana kamba ndefu kuliko mwingine? | | | | | | | | | | |

Soma grafu ifuatayo kuhusu ufaulu wa wanafunzi katika mtihani wa darasa la nne kisha jibu maswali Na. 23 na 24.



23. Mwaka wa pili walifaulu wanafunzi wangapi?

24. Mwaka gani wanafunzi wamefaulu wachache kuliko miaka mengine?

25. Kuna vipande vingapi vya mistari katika umbo lifuatalo:-

